

## Activity 5: Challenge time!!

- Let's use everything we have done this week to try these challenges!


Cakes are sold in boxes of 10  
Jack and Alex are trying to pack these cakes into boxes.



Jack says,




There are 5 groups of 10



Alex says,



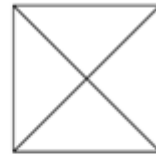
There are 6 groups of 10



Who is correct? Explain how you know.

Three children are splitting a square into equal parts.

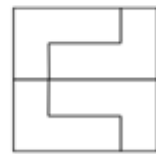
Teddy



Alex



Mo



Who has split the square into equal parts? Explain why.

### Odd One Out



$$\frac{1}{2}$$



One half

Which is the odd one out?  
Explain your answer.

Annie has some gummy bears.

She circles half of them.



How many gummy bears did she have at the start?

Visit these websites for additional support and home learning ideas!

