

Activity 5: Challenge time!!!

- Let's use everything we have done this week to try these challenges!



$$2 \times 5$$
$$5 + 5$$
$$5 \times 2$$

Each calculation could explain the image.

Explain why.

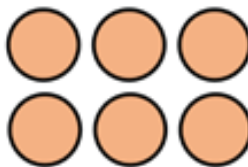
Eva says,



Every number in the 2 times-table is even.

Is she correct? Explain your answer.

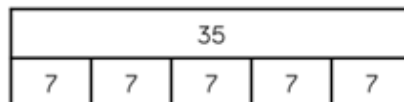
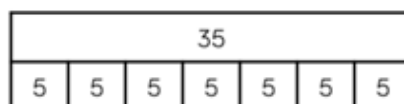
Part of this array is hidden.



The total is less than 16

What could the array be?

Tommy and Rosie have both drawn bar models to show 7×5



What's the same and what is different about their bar models?

Draw your own bar model to represent 4×5

Visit these websites for additional support and home learning ideas!

